

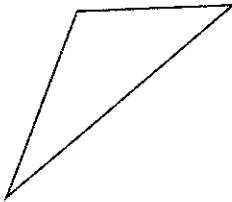
Homework

Identifying Triangles

Sides & Angles: S1

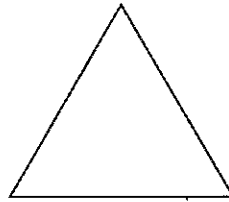
Identify each triangle based on both sides and angles.

1)

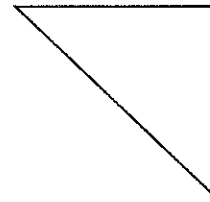


Scalene obtuse triangle

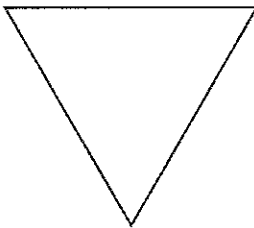
2)



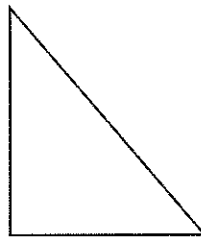
3)



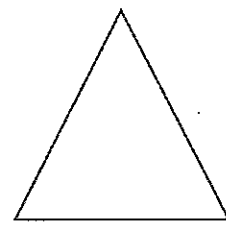
4)



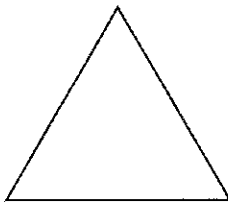
5)



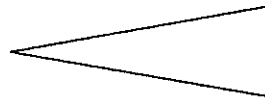
6)



7)



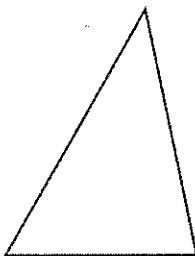
8)



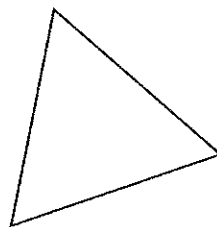
9)



10)



11)



12)

